

Electrodynamics, Physics 321
Winter 2006
Final exam
 Instructor: David Cobden

2.30 pm Wed 15 March

Do not turn this page until I say 'go' at 2.30 pm. You have 110 minutes. Hand your exam to the moderator before he leaves the room at 4.25 pm.

This exam contains 200 points. Be sure to attempt all the questions.


Please write your name on every page and your SID on the first page.

Write all your working on these question sheets. Use the front and back pages for extra working. It is important to show your calculation or derivation. You probably won't get full marks just for stating the correct answer if you don't show how you get it.

Watch the blackboard/overhead for corrections or clarifications during the exam.

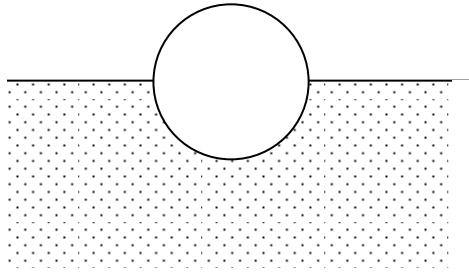
This is a closed book exam. No books, notes or calculators allowed.

$$V_{\text{dip}}(\mathbf{r}) = \frac{\mathbf{p} \cdot \hat{\mathbf{r}}}{4\pi\epsilon_0 r^2}, \quad \nabla \left(\frac{\mathbf{p} \cdot \hat{\mathbf{r}}}{r^2} \right) = \frac{3(\mathbf{p} \cdot \hat{\mathbf{r}})\hat{\mathbf{r}} - \mathbf{p}}{r^3}, \quad \frac{1}{(1 - 2su + s^2)^{1/2}} = \sum_{n=0}^{\infty} P_n(u) s^n$$



1. [10] Give expressions relating the polarization density \mathbf{P} to the bound charge density on the surface and in the bulk of a dielectric.
2. [10] Using these expressions, show that the total bound charge (the sum of total surface charge and total volume charge) on any piece of dielectric is zero. Explain why this has to be true.
3. [15] A thin sheet of dielectric material, in vacuum, has thickness a and *uniform* frozen-in polarization density \mathbf{P} perpendicular to its faces. Find the charge density, electric field \mathbf{E} , and displacement field \mathbf{D} , inside, on, and outside the slab. Do so only near the middle of sheet, ie, neglect edge effects.

4. [15] A conducting sphere of radius a held at voltage V_0 (relative to ground) is centered at the origin. Half the space around it, in the region $z < 0$, is filled with a uniform linear dielectric of relative permittivity ϵ_r , as indicated below. The rest of space, $z > 0$, is vacuum. Show that the electric field all around the sphere is the same as it would be if the dielectric were not present (ie, that this solution obeys all appropriate requirements).



5. [20] Find the energy stored at the applied voltage V_0 , and hence its self-capacitance.

A particle of charge q is a distance a above a planar conducting surface at $z = 0$ in vacuum.

6. [5] What is the force on the particle?

7. [20] Show that the (free) charge density on the conductor surface is $\sigma = \frac{-qa}{2\pi(r^2 + a^2)^{3/2}}$, where r is the distance from the origin which is directly beneath the particle in the $z = 0$ plane.


The space around the point charge is now entirely filled with a linear dielectric material having relative permittivity ϵ_r .

8. [5] Does the *free* charge density on the conductor change? Why (not)?

9. [5] Does the electrostatic force on the particle change? Why (not)? (This force must be balanced by a mechanical force from the dielectric to prevent the particle moving.)

Imagine that we have a polar molecule and an ion in a big and otherwise empty box. Taking the center of the molecule to be the origin and the x -axis to be oriented conveniently, this particular molecule can be thought of as a thin rigid bar of length L with positive line charge density λ_0 glued along one half ($x > 0$) and negative density $-\lambda_0$ glued along the other ($x < 0$), as indicated below.

10. [5] What is the dipole moment of the molecule?




11. [10] The ion has charge $+Q$ and is located at point \mathbf{r} , where $r \gg L$. What is the force exerted on the ion by the molecule?

12. [10] What is the torque on the molecule due to the ion?

13. [10] Show that the force exerted on the molecule by the ion is equal and opposite to the answer to Q. 11, as required by Newton's first law.

A particle – let's call it particle A – of charge q is inside a cavity inside a *neutral* conducting cube of side a . Another identical particle, B, is outside the cube at a distance about a , as sketched below.

14. [5] Is particle B attracted or repelled by the cube, and why?



B
 $q \bullet$

15. [5] The cube is now connected to ground. Is particle B now attracted or repelled by the cube, and why?

16. [15] Expand $\frac{1}{|\mathbf{r} - \mathbf{r}_k|}$ in powers of (r_k/r) , assuming $r > r_k$, defining θ_k as the angle between \mathbf{r} and \mathbf{r}_k . (see cover page).

17. [10] Show that every term in the expansion obeys Laplace's equation and say why it must.

18. [15] Assume the electronic charge cloud in an atom of atomic number Z has approximate charge density $\rho(r) = \rho_0 \exp(-r/a)$. Show that for $r \ll a$ the electric field inside the charge cloud, experienced by the nucleus, is $E(r) = \rho_0 r / (3\epsilon_0)$.

19. [10] Hence estimate the polarizability α of the atom in terms of the parameters given.